

Name : _____

Score : _____

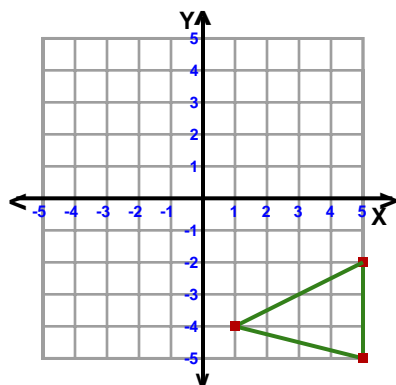
Teacher : _____

Date : _____

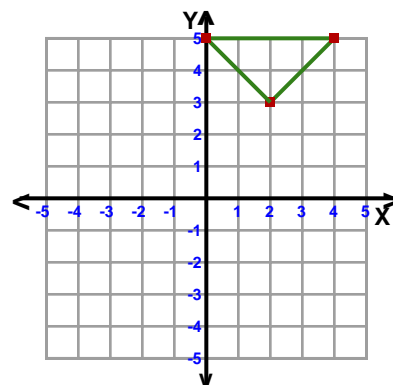
Transformations

ccw = counterclockwise

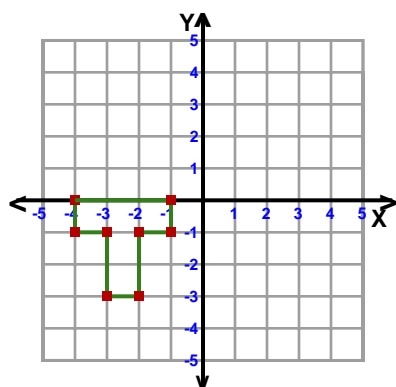
- 1) Reflection: Across Line $y = -x$



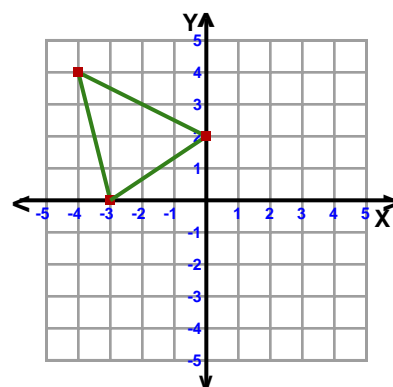
- 2) Translation: 3 left and 2 down



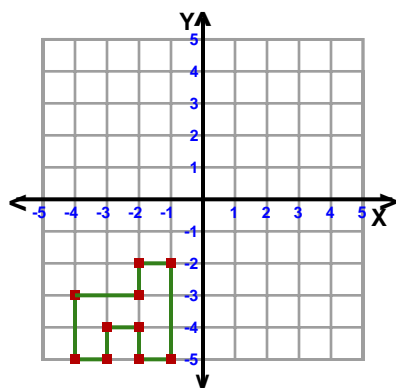
- 3) Reflection: Across the line $x = -1$



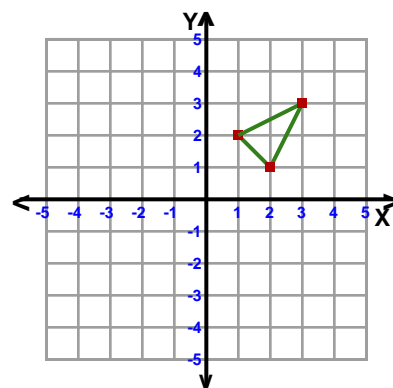
- 4) Rotation: 90° ccw about the origin



- 5) Translation: 2 right and 3 up



- 6) Rotation: 90° ccw about the origin



Name : _____

Score : _____

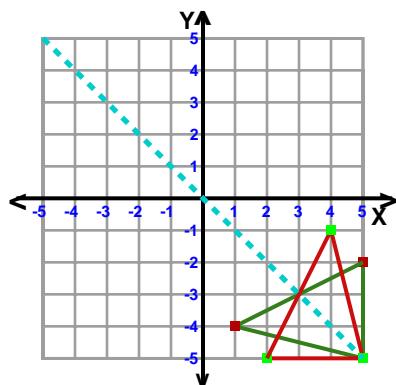
Teacher : _____

Date : _____

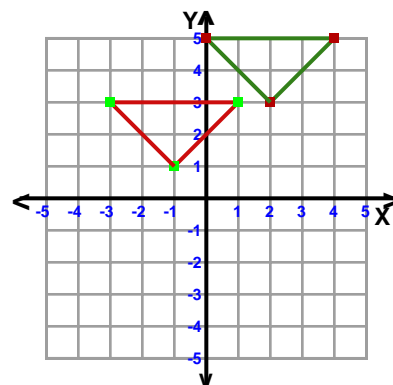
Transformations

ccw = counterclockwise

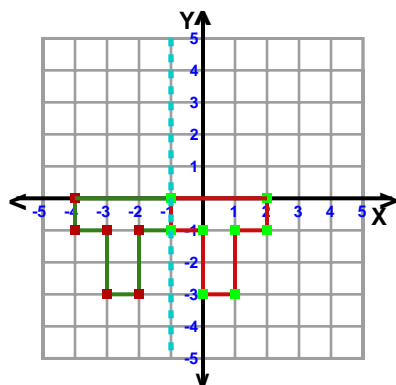
- 1) Reflection: Across Line $y = -x$



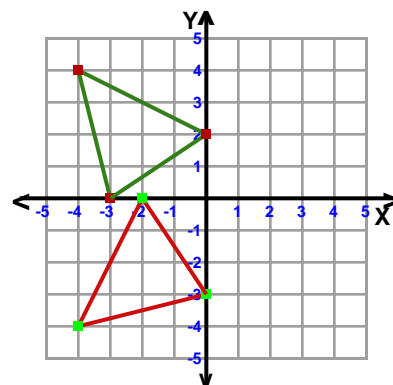
- 2) Translation: 3 left and 2 down



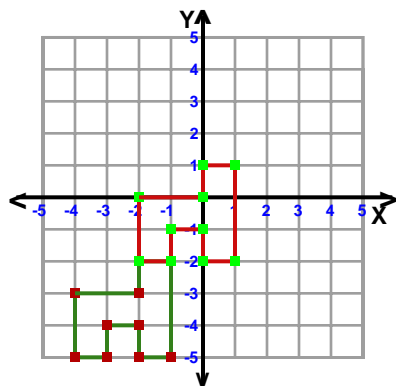
- 3) Reflection: Across the line $x = -1$



- 4) Rotation: 90° ccw about the origin



- 5) Translation: 2 right and 3 up



- 6) Rotation: 90° ccw about the origin

